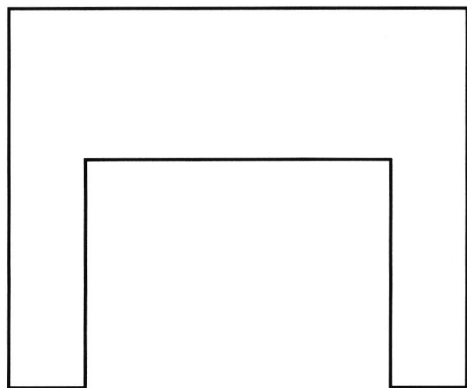


A Use a ruler to find the perimeter of the figure in centimeters.



Perimeter = _____ centimeters

7B

B Compare using $<$, $>$, or $=$.


$90 + 5$ ○ 95 $800 + 7$ ○ 810

$50 + 2$ ○ 50 $200 + 90$ ○ 290

$10 + 9$ ○ 18 $600 + 2$ ○ 603

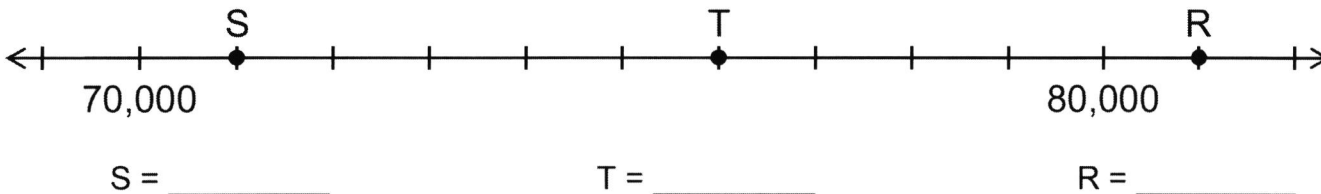
2D

C Circle the parallelograms.



6B

D Identify the values of points S, T, and R.




2C

1 There were 7 boys and 6 girls reading in the library. The librarian gave each of them 3 bookmarks. How many bookmarks did the librarian give them all together?

- (A) 16 (B) 33 (C) 36 (D) 39

4K

2 Delfina needs 3 eggs to make 1 omelet.



What is the greatest number of omelets she can make with 27 eggs?

- (A) 7 (B) 8 (C) 9 (D) 11

4K

3 Enye is 4 feet 4 inches tall. Falk is 10 inches taller than Enye. How tall is Falk in feet and inches?

- (A) 5 feet 2 inches
(B) 5 feet 4 inches
(C) 5 feet 6 inches
(D) 5 feet 8 inches

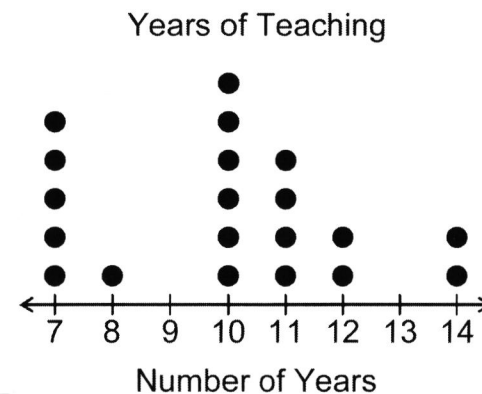
1B

4 Arnold scored 889 points while playing a video game. Willis scored 512 points. Which is the best estimate of how many more points Arnold scored than Willis?

- (A) 300 (B) 400 (C) 500 (D) 900

4B

5 The dot plot shows the number of years that 20 teachers have taught at Blanton Elementary. Each dot represents 1 teacher.



How many teachers have taught 10 or more years?

- (A) 14 (B) 12 (C) 10 (D) 8

8B